

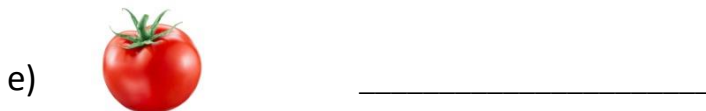
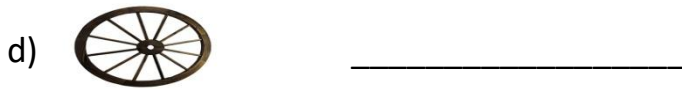
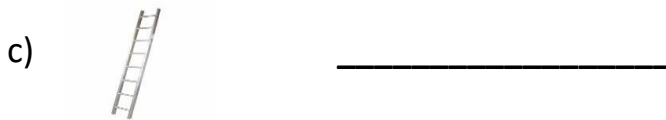
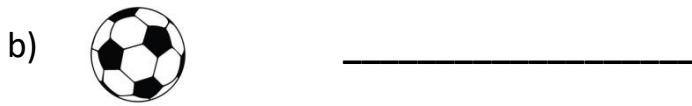
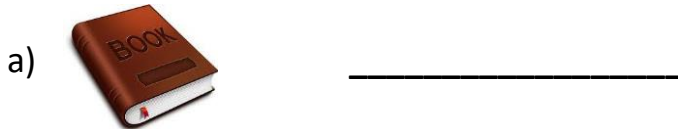


CLASS: II (A/B/C)

MATHS

WORKSHEET (2022-23)

I. Identify and write each object that can Roll (R) (or) Slide (S).



II. Write the numbers in words:

a) 14 = _____

b) 6 = _____

c) 19 = _____

d) 20 = _____

e) 8 = _____

III. Match the following:

January - 30

March - 31

April - 28

February - 30

September - 31

IV. Write number of tens and ones in the following numbers:

Tens

Ones

a) 96 = _____

b) 73 = _____

c) 34 = _____

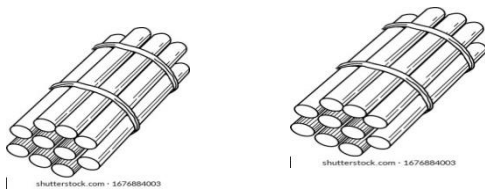
d) 52 = _____

V. Answer the following:

Each bundle has 10 sticks, Count the sticks, and how many tens and ones,

Write the total number of sticks?

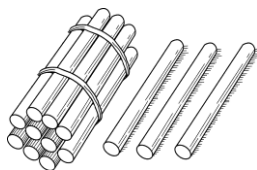
1)



Tens	Ones

Total number of sticks _____

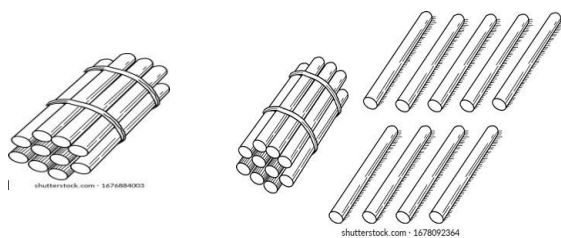
2)



Tens	Ones

Total number of sticks _____

3)



Tens	Ones

Total number of sticks _____

